

- 1 The gift box shown below has 8 packets of toffees arranged in it as shown.

Each packet has 6 toffees.

What is the total number of toffees in the box?

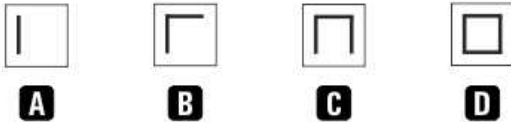


- A. 6
- B. 8
- C. 14
- D. 48

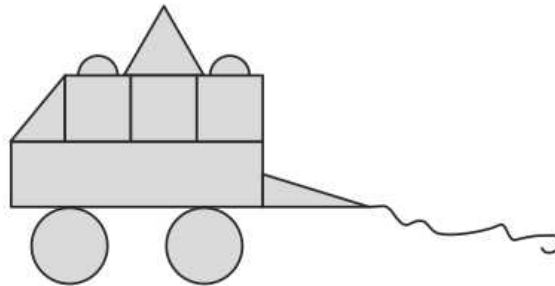
- 2 Given below is a pattern.



What should be the next pattern in place of ★?



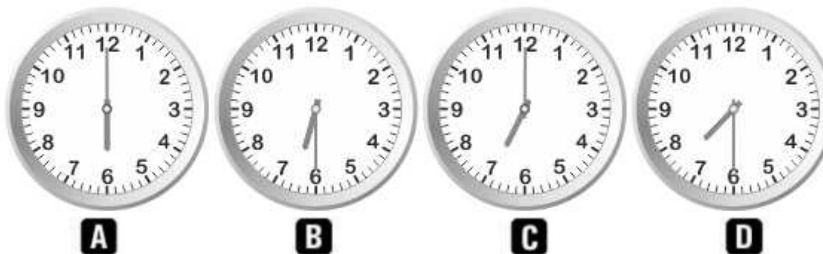
- 3 How many triangles are there in the figure below?



- A. 1
- B. 2
- C. 3
- D. 5

- 4 Kevin goes to the park at 6:30 PM and comes back after half an hour.

What time does the clock show when he comes back home?



1

D

2

C

3

C

4

C