

1 Nikita drew some snakes in her sketch book as shown below.

Which of these snakes is the longest?



2 What is the length of the key shown in the picture below?




- A. 5 cm
- B. 6 cm
- C. 8 cm
- D. 11 cm




3 Meghna has 12 dolls. She gives  $\frac{1}{4}$  of them to Dipti.

How many dolls did Dipti get?

- A. 1
- B. 2
- C. 3
- D. 4



4 Ranjana is playing a game. She has to fill the boxes below with pictures of cows, sheep and chickens. Each row and each column should contain three DIFFERENT animals.

		 Chicken
 Sheep		 Cow

She has already filled in three of the boxes.

Which animal picture will go in the shaded box?

- A. Cow
  - B. Sheep
  - C. Chicken
  - D. (Either the cow or the sheep could go in the shaded box.)
- 

1

C

2

A

3

C

4

B